

Inequalities

$>$ is greater than

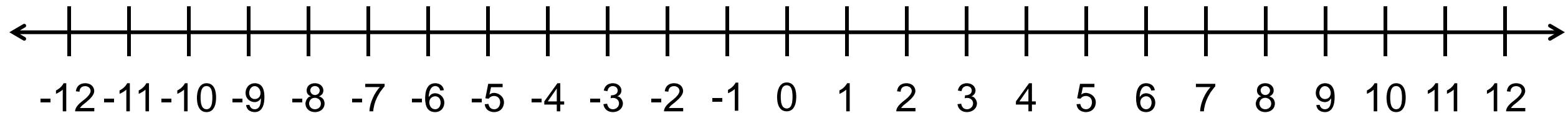
$<$ is less than

\neq is not equal to

\geq is greater than or equal to

\leq is less than or equal to

\approx is approximately equal to



Answer True or False.

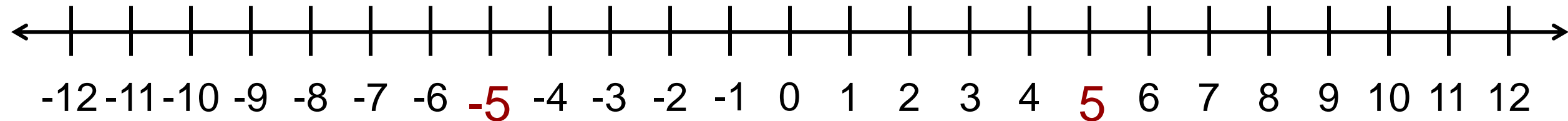
$$-4 > -5$$

$$4 > 5$$

$$-3\frac{2}{7} > -3\frac{3}{10}$$

$$-5 \leq 5$$

$$-3- > -3-$$



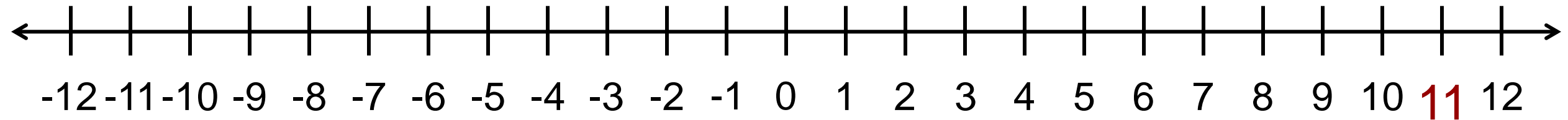
Answer True or False.

$7 \neq 10$

$7 \neq 7$

$-8 \geq -7$

$11 \leq 11$



Translate each word statement to a math statement.

Seven is less than ten.

$<$

Seven less than ten.

$-$

Translate each word statement to a math statement.

x is greater than ten.

$>$

x greater than ten.

$+$